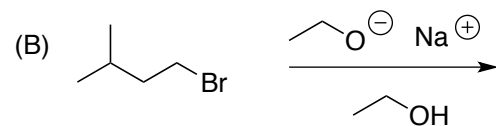
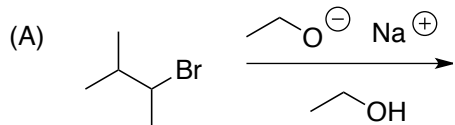


Quiz 2. Wednesday Morning

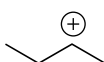
Name:

1a) Predict the major products of the following 2 elimination reactions.(4 points)

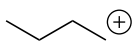


b) Using curved arrows, show a mechanism for (A). (2 points)

2) Which of the following cations is the most stable, which is the least stable, and explain your answers (4 points).



\_\_\_\_\_



\_\_\_\_\_



\_\_\_\_\_